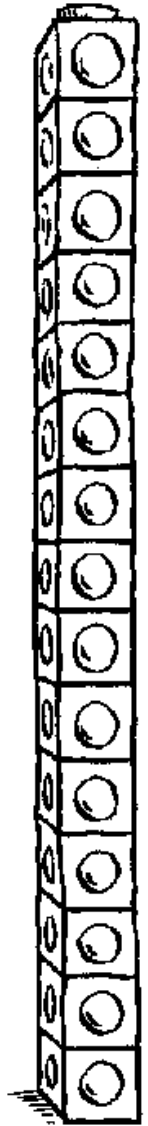
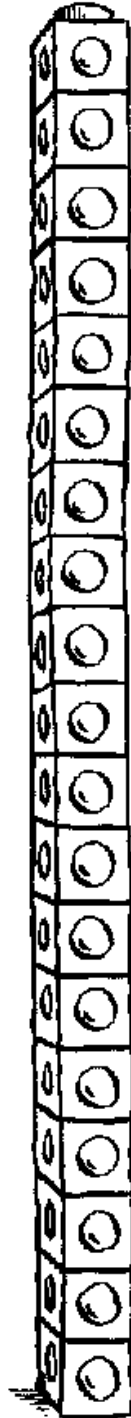
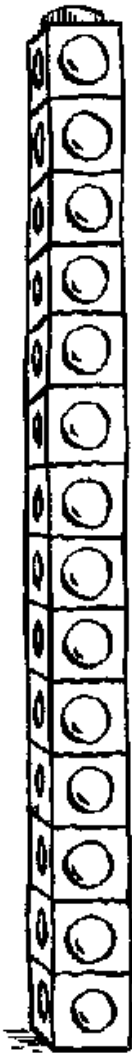




Count the cubes and write the number in the space provided.

N1


counting to 20




How many elephants can you see?




Colour the groups that have the same number.




stars



leaves



ghosts




spots

1	2	3	4	5	6	7	8	9	1	1	1	1	1	1	1	1	1	2	
									0	1	2	3	4	5	6	7	8	9	0

Fill in the missing numbers

- 1) _____, 3, 4, _____, _____, _____, _____
- 2) 11, 12, _____, 14, _____, _____, _____
- 3) _____, 15, _____, _____, 18, _____, 20
- 4) 9, _____, _____, _____, 13, _____, 15
- 5) 7, 8, _____, 10, _____, _____, _____



Count backwards

- 1) 5, 4, _____, _____, _____, _____
- 2) 9, _____, 7, _____, _____, _____
- 3) 12, _____, _____, 9, _____, _____
- 4) 14, _____, 12, _____, _____, 9
- 5) 20, 19, _____, _____, _____, 15



Colour to match



Draw balls to
show the number.



1

three

2

one

3

five

4

seven

5

six

6

two

7

nine

8

ten


9

four

10

eight

Bzzz...
Well done!!



Count the letters of the number names and the number names in the correct sack.

N2

number names

one

five

eight

two

six


nine

three

seven

ten

four



1. 2. 3. 4.

4

Write the number that comes next.

5. 9, 6. 18,


2

Write the number that comes before.

7. , 10 8. , 20

2

9. Join each set of balloons to the correct number and number name.



8

three

3

five

eight

5

6

Score: / 14

Total: