

Throw the dice, draw the spots, write and work out the sums.



N3

adding

	+	
	+	
	+	
	+	
	+	
	+	
	+	
	+	
	+	

$$\underline{6} + \underline{4} = \underline{10}$$

$$\underline{\quad} + \underline{\quad} = \underline{\quad}$$

$$\underline{\quad} + \underline{\quad} = \underline{\quad}$$

$$\underline{\quad} + \underline{\quad} = \underline{\quad}$$

$$\underline{\quad} + \underline{\quad} = \underline{\quad}$$

$$\underline{\quad} + \underline{\quad} = \underline{\quad}$$

$$\underline{\quad} + \underline{\quad} = \underline{\quad}$$

$$\underline{\quad} + \underline{\quad} = \underline{\quad}$$

$$\underline{\quad} + \underline{\quad} = \underline{\quad}$$

# adding

Add the numbers in the grid. Write the correct number in each space.

N4

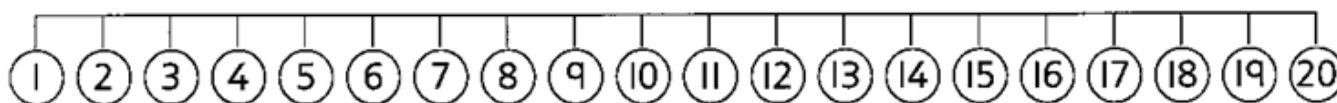
+	5	8	9	7
1		9		



Add the numbers:

$5 + 6 = \square$     $4 + 8 = \square$     $6 + 7 = \square$     $10 + 5 = \square$

$3 + 6 = \square$     $7 + 5 = \square$     $8 + 4 = \square$     $10 + 9 = \square$



Fill in the missing numbers:

$5 + 6 + 2 = \square$     $6 + 3 + 5 = \square$     $10 + 4 + 2 = \square$

$10 + \square + 3 = 18$



$\square + 10 + 3 = 19$







1.       2.       3.       4.

4

Count on to match the fingers and write the answer.

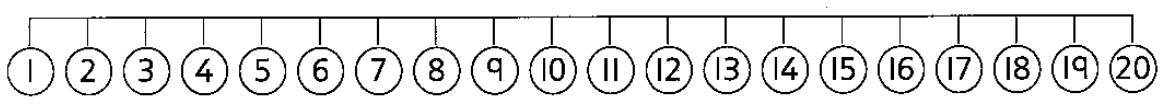
5.  +  =

6.  +  =

7.  +  =



3



Write the missing numbers.

8.  $4 + 5 + 2 = \square$

9.  $6 + 4 + 5 = \square$

10.  $10 + \square + 3 = 18$

11.  $\square + 13 + 2 = 17$

4

Score:  / 11

Total: