



Roll a dice, write the number in the box, then take away.

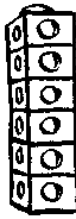
N5


taking away

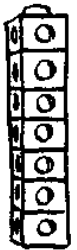


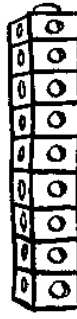
 $6 - \square = \square$


 $7 - \square = \square$

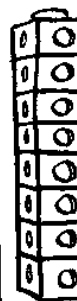
 $\square - \square = \square$

 $\square - \square = \square$

 $\square - \square = \square$

 $\square - \square = \square$

 $\square - \square = \square$

 $\square - \square = \square$

1.       2.       3.       4.

Write the answers.


5.  $8 \xrightarrow{2 \text{ less}} \square$

6.  $7 \xrightarrow{3 \text{ less}} \square$

7.  $5 \xrightarrow{1 \text{ less}} \square$

8.  $6 \xrightarrow{2 \text{ less}} \square$

9. Join each cloud to the correct answer.



Write the missing numbers.

10.  $8 - \square = 5$

11.  $7 - \square = 5$

12.  $9 - \square = 6$

13.  $8 - \square = 4$


Score:  / 16

Total:

1.       2.       3.       4.

4

5. Join the toys to the correct totals.



4

Write how much.

6.

7.

2

Complete these.

8.  $5c + 2c + 1c = \square c$       9.  $5c + 2c + 2c = \square c$

10.  $2c + 2c + 2c = \square c$       11.  $5c + 5c + 1c = \square c$

4

Score:  / 14

Total: